



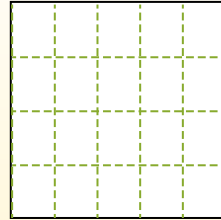
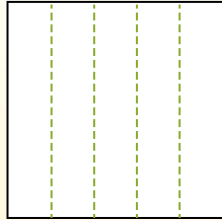
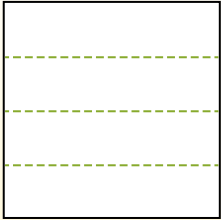
Partition the shape as described and then count to find the number of boxes.

Answers

Rows go left to right.


Columns go up and down.

This has 4 rows and 5 columns.
There are 20 boxes total.



1. _____
2. _____
3. _____
4. _____
5. _____
6. _____
7. _____
8. _____
9. _____


1) 5 rows
4 columns




2) 2 rows
4 columns



3) 2 rows
3 columns



4) 4 rows
3 columns




5) 5 rows
5 columns




6) 2 rows
2 columns




7) 4 rows
2 columns



8) 2 rows
5 columns



9) 4 rows
4 columns



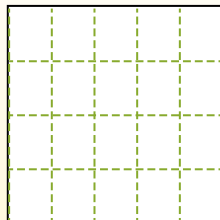
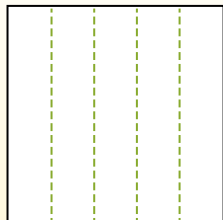



Partition the shape as described and then count to find the number of boxes.


Rows go left to right.

Columns go up and down.

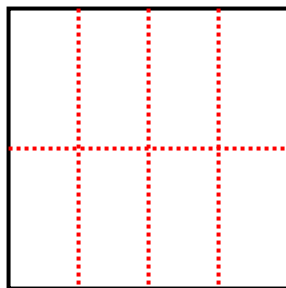
This has 4 rows and 5 columns.
There are 20 boxes total.



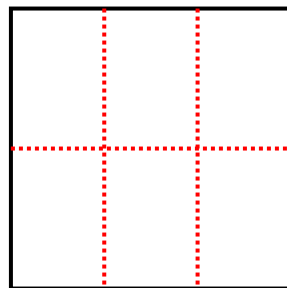
1) 5 rows
4 columns



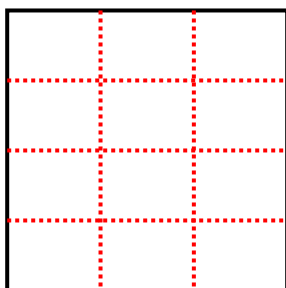
2) 2 rows
4 columns



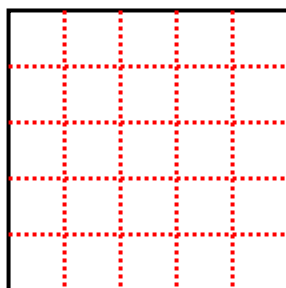
3) 2 rows
3 columns



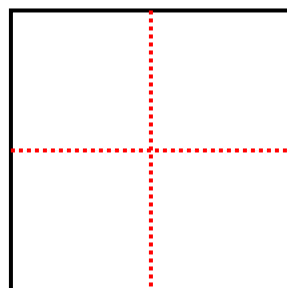
4) 4 rows
3 columns



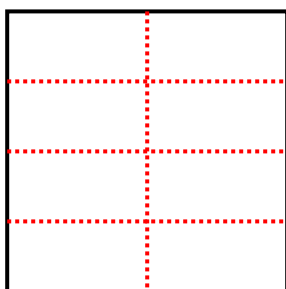
5) 5 rows
5 columns



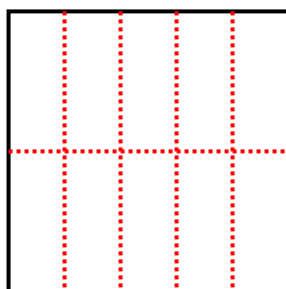
6) 2 rows
2 columns



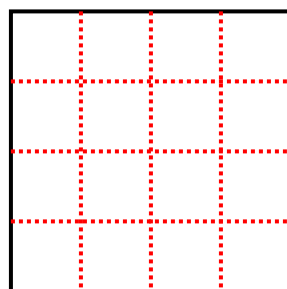
7) 4 rows
2 columns



8) 2 rows
5 columns



9) 4 rows
4 columns



Answers

1. 20

2. 8

3. 6

4. 12

5. 25

6. 4

7. 8

8. 10

9. 16